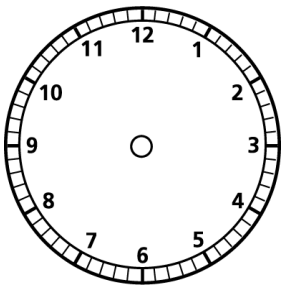




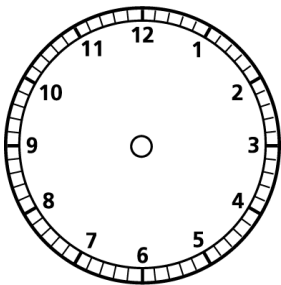
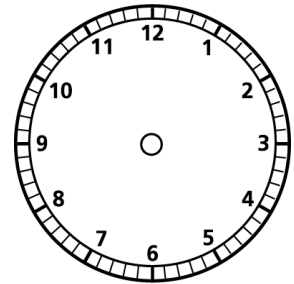
# WHAT TIME IS IT?

Read the sentences and draw hands on the clocks to match the time:



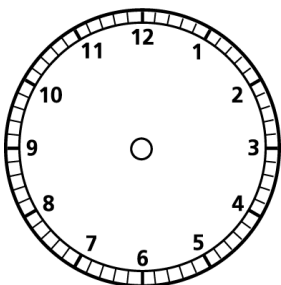
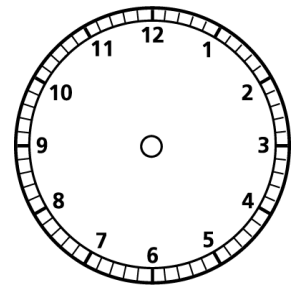
1) It's half past six

2) It's a quarter to nine



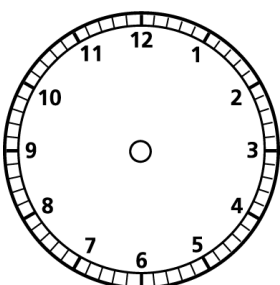
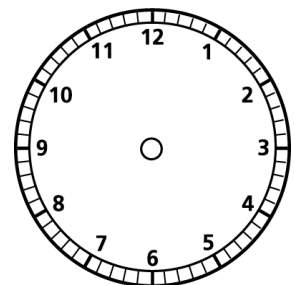
3) It's two o'clock

4) It's a quarter past ten



5) It's half past eight.

6) It's a quarter to twelve



7) It's five o'clock

8) It's a quarter to four

