

# What time is it?




Maestralidia.com

- 1) Listen to your teacher and draw the hands.
- 2) Write the time near the clocks



\_\_\_\_\_



\_\_\_\_\_



\_\_\_\_\_



\_\_\_\_\_




\_\_\_\_\_



\_\_\_\_\_



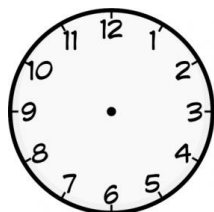
\_\_\_\_\_




\_\_\_\_\_

- 3) Read and draw the hands on the clocks

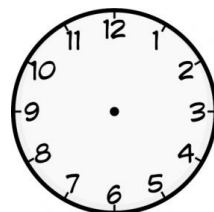
It's half past 5.



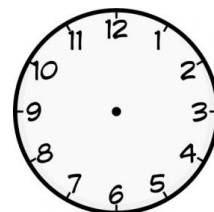
It's a quarter past 7.



It's 9 o'clock



It's a quarter to 10



It's half past 2

